

Name \_\_\_\_\_

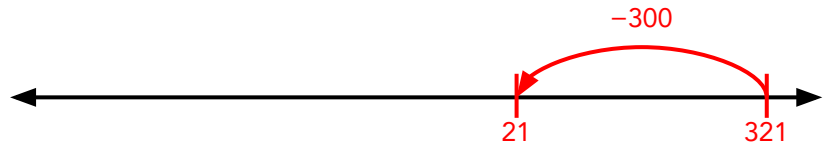
Date \_\_\_\_\_

Answer Key

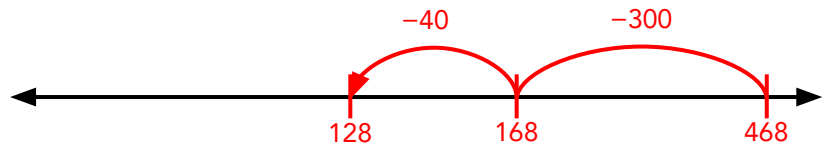
# Subtracting Three – Digit Numbers on an Open Number Line #3

Find each difference using the number line. **Sample Answers**

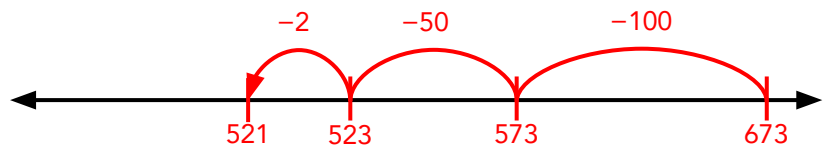
$$321 - 300 = \boxed{21}$$



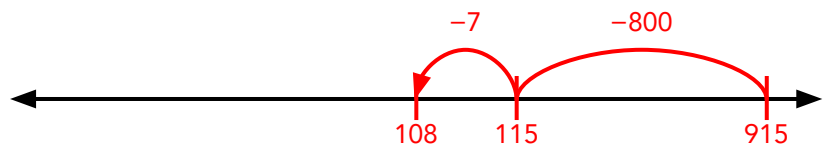
$$468 - 340 = \boxed{128}$$



$$673 - 152 = \boxed{521}$$



$$915 - 807 = \boxed{108}$$



$$737 - 561 = \boxed{176}$$

