

Name \_\_\_\_\_

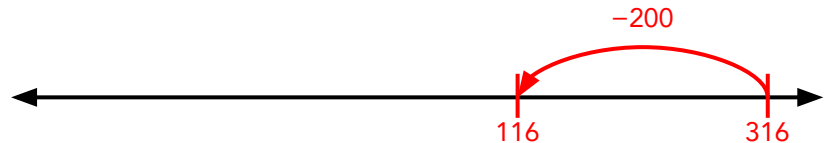
Date \_\_\_\_\_

Answer Key

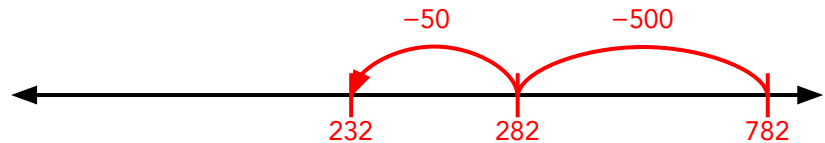
# Subtracting Three – Digit Numbers on an Open Number Line #1

Find each difference using the number line. **Sample Answers**

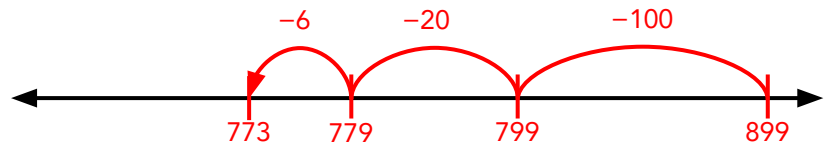
$$316 - 200 = \boxed{116}$$



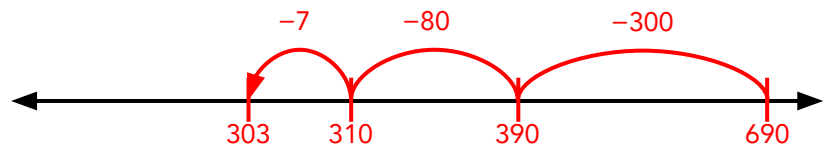
$$782 - 550 = \boxed{232}$$



$$899 - 126 = \boxed{773}$$



$$690 - 387 = \boxed{303}$$



$$919 - 495 = \boxed{424}$$

