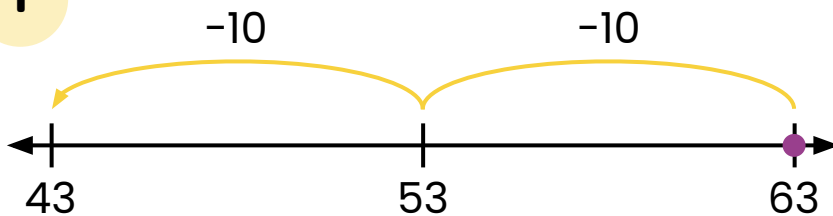


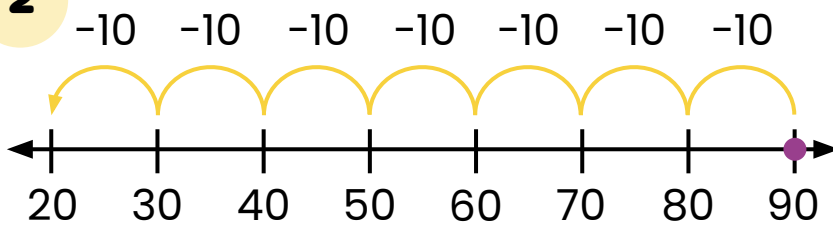
Subtracting Tens on an Open Number Line: Write the Equation #3



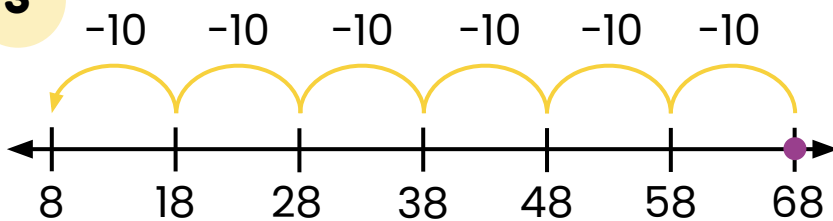
Directions: Write the equation that matches each number line.

1

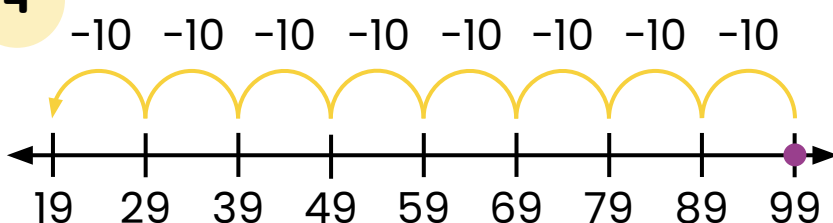
$$\boxed{63} - \boxed{20} = \boxed{43}$$

2

$$\boxed{90} - \boxed{70} = \boxed{20}$$

3

$$\boxed{68} - \boxed{60} = \boxed{8}$$

4

$$\boxed{99} - \boxed{80} = \boxed{19}$$