
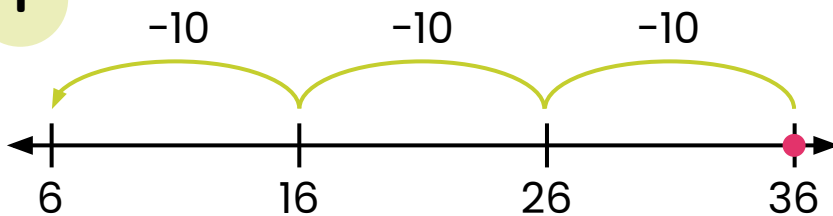


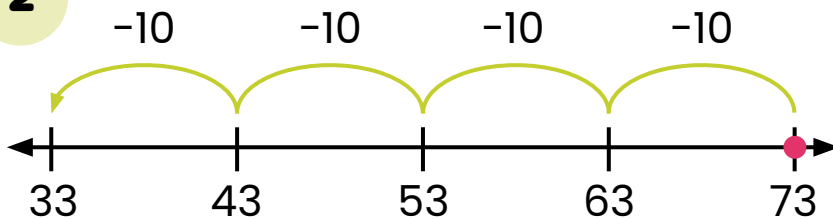
# Subtracting Tens on an Open Number Line: Write the Equation #2



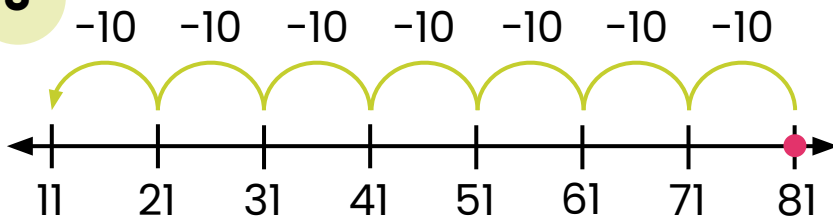
Directions: Write the equation that matches each number line.

**1**

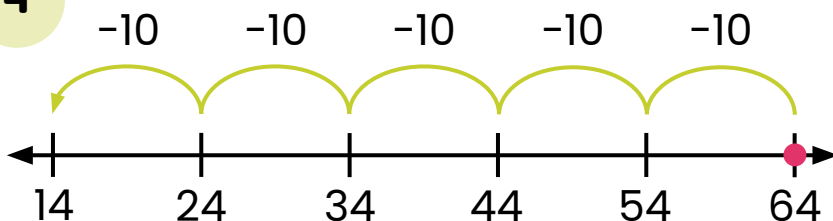
$$\boxed{36} - \boxed{30} = \boxed{6}$$

**2**

$$\boxed{73} - \boxed{40} = \boxed{33}$$

**3**

$$\boxed{81} - \boxed{70} = \boxed{11}$$

**4**

$$\boxed{64} - \boxed{50} = \boxed{14}$$