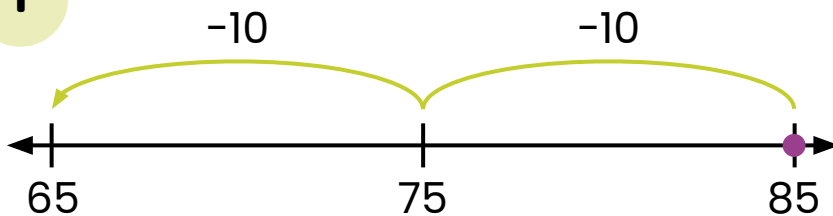


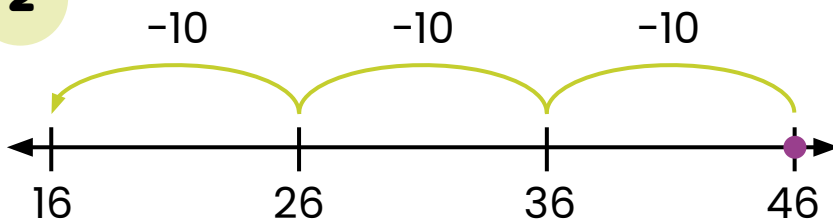
Subtracting Tens on an Open Number Line: Write the Equation #1



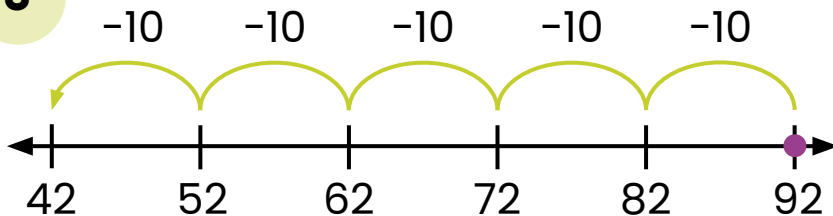
Directions: Write the equation that matches each number line.

1

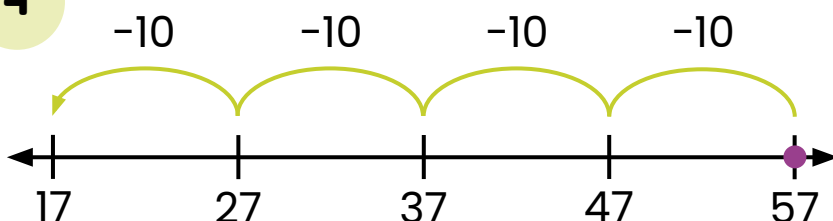
$$\boxed{85} - \boxed{20} = \boxed{65}$$

2

$$\boxed{46} - \boxed{30} = \boxed{16}$$

3

$$\boxed{92} - \boxed{50} = \boxed{42}$$

4

$$\boxed{57} - \boxed{40} = \boxed{17}$$