

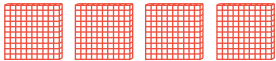





Name _____

Date _____

Answer Key**SUBTRACTING MULTIPLES OF 100**


PART 1: Write the word, number, and base-ten block sketch for multiples of 100, up to 900. The first multiple of 100 is already drawn for you.

WORD	NUMBER	BASE-TEN BLOCK SKETCH
one hundred	100	
two hundred	200	
three hundred	300	
four hundred	400	
five hundred	500	
six hundred	600	
seven hundred	700	
eight hundred	800	
nine hundred	900	

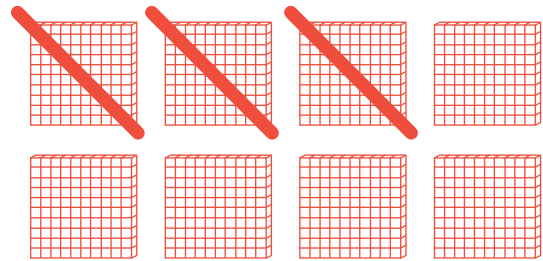
SUBTRACTING MULTIPLES OF 100

PART 2: Cut these cards out. Match the base-ten block sketch with the correct equation! Be sure to create your own equation and sketch on the blank flashcards using multiples of 100.

$$\begin{array}{r} 500 \\ - 100 \\ \hline 400 \end{array}$$



$$\begin{array}{r} 800 \\ - 300 \\ \hline 500 \end{array}$$



$$\begin{array}{r} 300 \\ - 200 \\ \hline 100 \end{array}$$

