

Name: _____

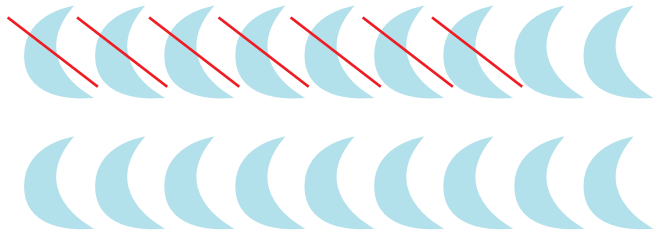
Date: _____

Subtracting in Space


Count all the objects in the group. Cross out the objects in each group to show how many you are subtracting. Count how many are left and write the answer.




$$1. 13 - 3 = \underline{10}$$



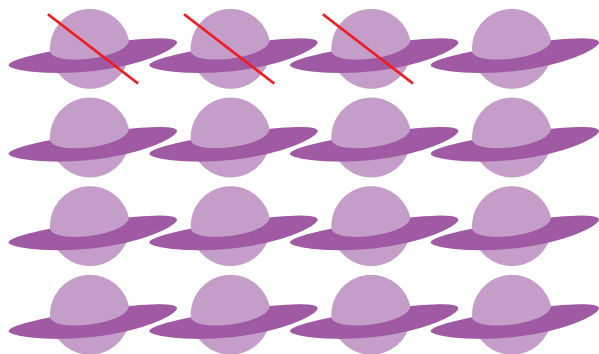
$$2. 18 - 7 = \underline{11}$$




$$3. 15 - 4 = \underline{11}$$



$$4. 20 - 8 = \underline{12}$$



$$5. 16 - 3 = \underline{13}$$



$$6. 17 - 7 = \underline{10}$$