

Name: _____

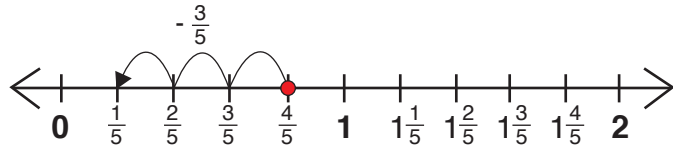
Date: _____

Answers**Subtract Fractions**

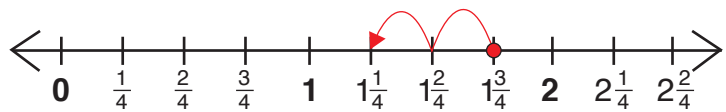
← on a Number Line →

Directions: Use each number line to subtract the fractions.
Remember to fill in the missing numbers on the blank number lines!

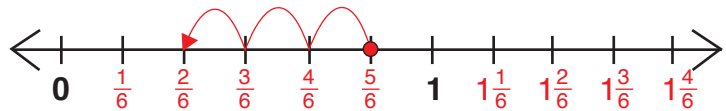
Example: $\frac{4}{5} - \frac{3}{5} = \frac{1}{5}$



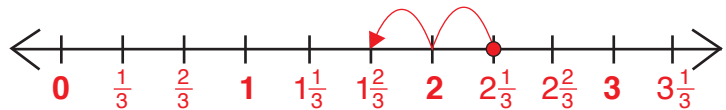
a) $1\frac{3}{4} - \frac{2}{4} = \underline{1\frac{1}{4}}$



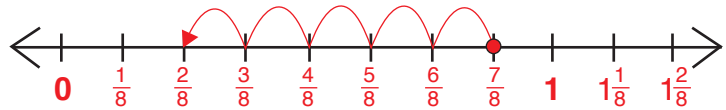
b) $\frac{5}{6} - \frac{3}{6} = \underline{\frac{2}{6}}$



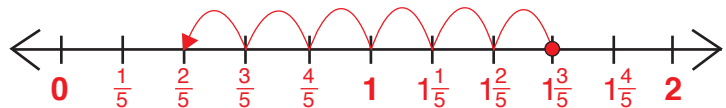
c) $2\frac{1}{3} - \frac{2}{3} = \underline{1\frac{2}{3}}$



d) $\frac{7}{8} - \frac{5}{8} = \underline{\frac{2}{8}}$



e) $1\frac{3}{5} - 1\frac{1}{5} = \underline{\frac{2}{5}}$



Challenge!

f) $\frac{1}{2} - \frac{3}{8} = \frac{4}{8} - \frac{3}{8}$
 $= \frac{1}{8}$

