


# Let's Practice Subtraction! 1-5


Use the drawings to solve the problems below.

**Example:**




5 take away 3 equals 2

$$5 - 3 = \underline{2}$$



$$4 - 3 = \underline{1}$$




$$2 - 1 = \underline{1}$$



$$3 - 1 = \underline{2}$$



$$5 - 2 = \underline{3}$$



$$3 - 2 = \underline{1}$$



$$5 - 1 = \underline{4}$$