


Let's Practice Subtraction! 1-10

Use the drawings to solve the problems below.

Example:



8 take away 4 equals 4


$$8 - 4 = \underline{4}$$



$$9 - 7 = \underline{2}$$




$$6 - 3 = \underline{3}$$



$$10 - 5 = \underline{5}$$



$$7 - 4 = \underline{3}$$



$$8 - 2 = \underline{6}$$



$$9 - 5 = \underline{4}$$