


Measurement: Converting Pounds & Ounces

Example: How much do the jelly beans weigh?



$$18 \text{ oz} = ? \text{ lbs}$$

Since there are 16 oz in 1 lb, we will divide 16 oz into 18 oz. The whole number will reveal the lbs and the remainder will reveal the oz.

$$\begin{array}{r} 1 \text{ R } 2 \\ 16 \overline{) 18} \\ \underline{16} \\ 2 \end{array}$$

Answer: 1 lb 2 oz



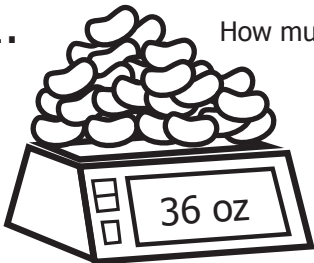
Please convert the following weights. Be sure to show your work!

Conversion Key

16 ounces = 1 pound

ounces = oz
pounds = lbs


1. How much do the jelly beans weigh?



$$\begin{array}{r} 2 \text{ R } 4 \\ 16 \overline{) 36} \\ \underline{32} \\ 4 \end{array}$$

2 lbs 4 oz


2. How much does the Easter egg weigh?
(Hint: Use multiplication to solve this problem!)



$$2 \times 16 = 32$$

32 oz

3. How much do the marshmallow chicks weigh?



$$\begin{array}{r} 1 \text{ R } 13 \\ 16 \overline{) 29} \\ \underline{16} \\ 13 \end{array}$$

1 lbs 13 oz

4. How much does the chocolate bunny weigh?



$$3 \times 16 = 48$$

$$48 + 4 = 52$$

52 oz

5. How much does the Easter basket weigh?



$$5 \times 16 = 80$$

$$80 + 6 = 86$$

86 oz

Bonus:

If you removed a chocolate bunny that weighs **2 lbs 9 oz** from the basket, how many **ounces** will the basket then weigh?

$$2 \times 16 = 32$$

$$32 + 9 = 41$$

$$86 \text{ oz} - 41 \text{ oz} =$$

45 oz

