






Spending Money Word Problems






Read the word problems. Then fill out the number bonds to answer the question. Show your work.

Problem	Number Bond	Work Space	Answer
<p>Example: Gloria had 26¢. She gave Penelope 14¢ to buy a chocolate bar. How much did she have left over?</p> 	<div style="text-align: center; border: 1px solid black; padding: 10px; width: fit-content; margin: 0 auto;">26¢</div> <div style="display: flex; justify-content: space-around; margin-top: 10px;"> <div style="text-align: center; border: 1px solid black; border-radius: 50%; padding: 10px; width: 40px;">14¢</div> <div style="text-align: center; border: 1px solid black; border-radius: 50%; padding: 10px; width: 40px;">?</div> </div>	$\begin{array}{r} 26 \\ -14 \\ \hline 12 \end{array}$	12¢
<p>1. Kieran had 88¢. How much would he have left over if he bought a whistle for 75¢?</p> 	<div style="text-align: center; border: 1px solid black; padding: 10px; width: fit-content; margin: 0 auto;">88¢</div> <div style="display: flex; justify-content: space-around; margin-top: 10px;"> <div style="text-align: center; border: 1px solid black; border-radius: 50%; padding: 10px; width: 40px;">75¢</div> <div style="text-align: center; border: 1px solid black; border-radius: 50%; padding: 10px; width: 40px;">?</div> </div>	$\begin{array}{r} 88 \\ -75 \\ \hline 13 \end{array}$	13¢
<p>2. Sin-Ku had 94¢. He bought a cookie for 75¢ from the bake sale. How much money did he have left?</p> 	<div style="text-align: center; border: 1px solid black; padding: 10px; width: fit-content; margin: 0 auto;">94¢</div> <div style="display: flex; justify-content: space-around; margin-top: 10px;"> <div style="text-align: center; border: 1px solid black; border-radius: 50%; padding: 10px; width: 40px;">75¢</div> <div style="text-align: center; border: 1px solid black; border-radius: 50%; padding: 10px; width: 40px;">?</div> </div>	$\begin{array}{r} 94 \\ -75 \\ \hline 19 \end{array}$	19¢

Spending Money Word Problems



Keep going! Read the word problems. Then fill out the number bonds to answer the question. Show your work.

Problem	Number Bond	Work Space	Answer
<p>3. Milo had 55¢. He bought a comic book at a garage sale for 49¢. How much money did he have left over?</p> 	<div style="border: 1px solid black; width: 100px; height: 100px; margin: 0 auto; text-align: center; line-height: 100px;">55¢</div> <div style="display: flex; justify-content: space-around; margin-top: 10px;"> <div style="border: 1px solid black; border-radius: 50%; width: 50px; height: 50px; display: flex; align-items: center; justify-content: center;">49¢</div> <div style="border: 1px solid black; border-radius: 50%; width: 50px; height: 50px; display: flex; align-items: center; justify-content: center;">?</div> </div>	$\begin{array}{r} 55 \\ - 49 \\ \hline 6 \end{array}$	6¢
<p>4. Andrea had 48¢. She bought origami paper from Milo for 25¢. How much money did Andrea have left?</p> 	<div style="border: 1px solid black; width: 100px; height: 100px; margin: 0 auto; text-align: center; line-height: 100px;">48¢</div> <div style="display: flex; justify-content: space-around; margin-top: 10px;"> <div style="border: 1px solid black; border-radius: 50%; width: 50px; height: 50px; display: flex; align-items: center; justify-content: center;">25¢</div> <div style="border: 1px solid black; border-radius: 50%; width: 50px; height: 50px; display: flex; align-items: center; justify-content: center;">?</div> </div>	$\begin{array}{r} 48 \\ - 25 \\ \hline 23 \end{array}$	23¢
<p>5. Norah had 67¢. She bought a raffle ticket at the school fair for 25¢. How much did she have left to spend?</p> 	<div style="border: 1px solid black; width: 100px; height: 100px; margin: 0 auto; text-align: center; line-height: 100px;">67¢</div> <div style="display: flex; justify-content: space-around; margin-top: 10px;"> <div style="border: 1px solid black; border-radius: 50%; width: 50px; height: 50px; display: flex; align-items: center; justify-content: center;">25¢</div> <div style="border: 1px solid black; border-radius: 50%; width: 50px; height: 50px; display: flex; align-items: center; justify-content: center;">?</div> </div>	$\begin{array}{r} 67 \\ - 25 \\ \hline 42 \end{array}$	42¢