

Repeated Addition on the Farm

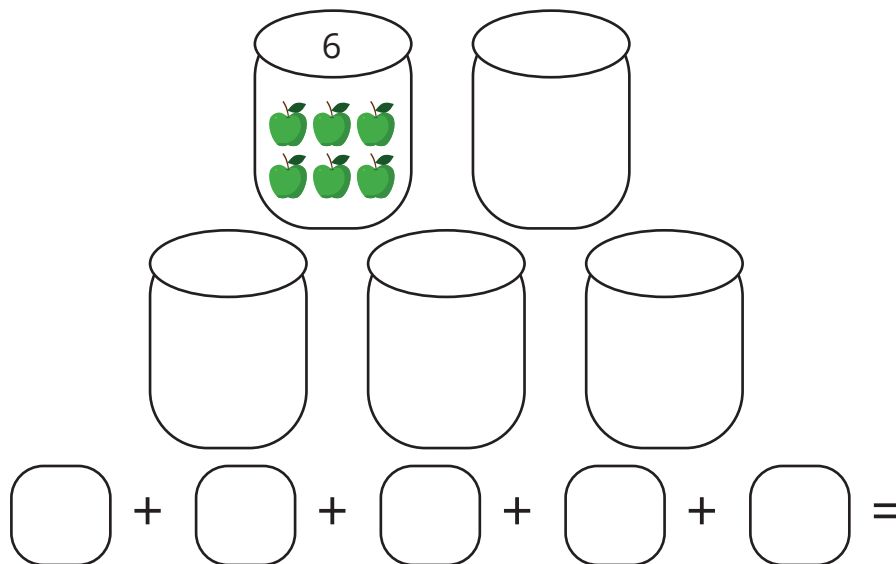
Name: _____

Date: _____

Complete the illustration for each exercise and answer the questions that follow.

1. Karly is helping with the harvest on her grandfather's farm. She has 5 apple barrels. If she puts 6 apples into each barrel, how many apples has she harvested altogether?

Finish the drawing below and use repeated addition to solve.



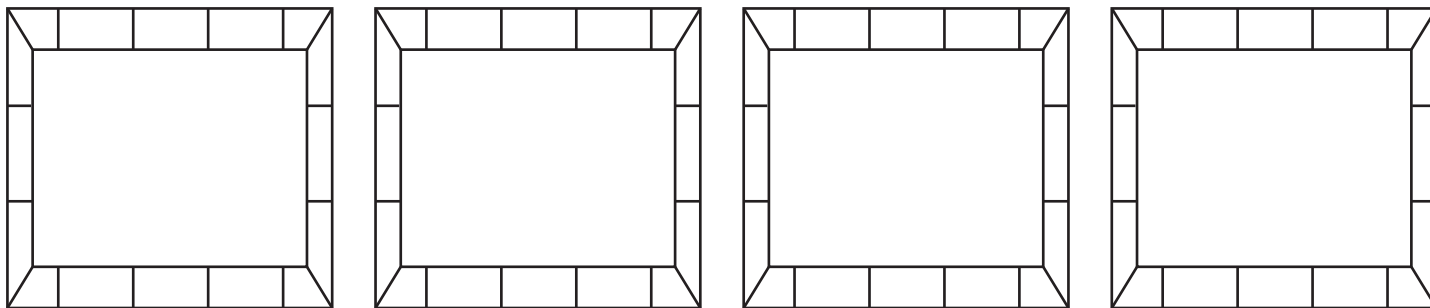
Answers

Write a multiplication problem to show how many apples Karly harvested.

$$6 + 6 + 6 + 6 + 6 = 30$$

$$6 \times 5 = 30$$

2. Shep the sheepdog has herded the new baby lambs into their enclosures. There are 4 enclosures with 7 lambs in each. How many lambs are there altogether?



Use repeated addition to solve. $7 + 7 + 7 + 7 = 28$

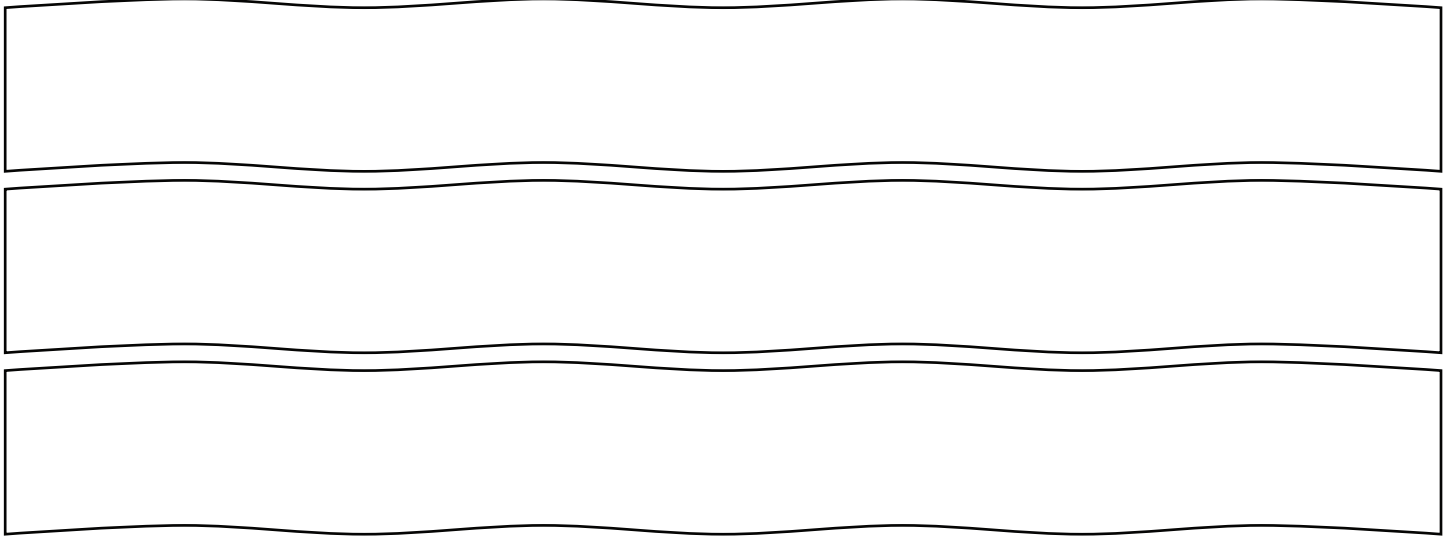
Write a multiplication problem to show how many lambs Shep herded. $7 \times 4 = 28$

Repeated Addition on the Farm

Name: _____

Date: _____

3. Uncle Peter is sowing corn in the fields. There are 3 rows in the corn field and he is planting 8 seeds in each row. How many stalks of corn will Peter plant altogether?

Three empty rectangular boxes with wavy top and bottom edges, arranged vertically, intended for drawing corn stalks in three rows.

Use repeated addition to solve. $8 + 8 + 8 = 24$

Write a multiplication problem to show how many corn stalks Peter will plant.

$$8 \times 3 = 24$$

4. Grandma Tilly is collecting eggs for breakfast. There are 6 hens in the henhouse. Each hen laid 4 eggs. How many eggs can Grandma collect?

Draw a picture.

Use repeated addition to solve. $4 + 4 + 4 + 4 + 4 + 4 = 24$

Write a multiplication problem to show how many eggs Grandma can collect.

$$4 \times 6 = 24$$