


ANSWER SHEET

Math
Multiplication

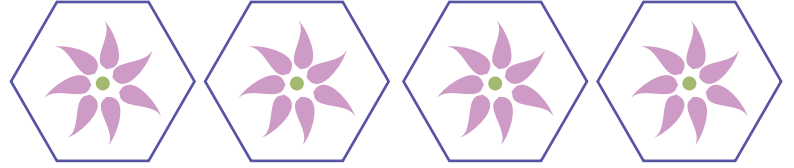
Making Multiplication Sentences

Look at each picture below. Write both the addition and multiplication facts that illustrate each picture. The first one is done for you.




$$2 + 2 + 2$$

$$2 \times 3 = 6$$




$$1 + 1 + 1 + 1$$

$$1 \times 4 = 4$$




$$3 + 3 + 3$$

$$3 \times 3 = 9$$



$$5 + 5 + 5 + 5$$

$$5 \times 4 = 20$$



$$4 + 4 + 4 + 4 + 4 + 4$$

$$4 \times 6 = 24$$