

Name: _____







Date: _____

Real World Rounding

Rounding numbers gives an approximate amount of something. Round the numbers below to solve each problem.







Kimmy was making fruit salad. She put in 9 strawberries, 25 orange wedges, 19 kiwi slices, 28 blueberries, 14 grapes, and 31 raspberries. Round each number to the nearest ten to figure out **about** how much fruit Kimmy used.

ANSWERS

About how many strawberries did Kimmy use?  10	About how many orange wedges did Kimmy use?  30	About how many kiwi slices did Kimmy use?  20
About how many blueberries did Kimmy use?  30	About how many grapes did Kimmy use?  10	About how many raspberries did Kimmy use?  30

★ Bonus: About how many more orange wedges are there than strawberries? 20

Andre collects stickers. He has 148 superhero stickers, 239 baseball stickers, 561 holographic stickers, 394 flower stickers, 157 animal stickers, and 416 football stickers. Round each number to the nearest hundred to figure out **about** how many stickers Andre has.

About how many superhero stickers does Andre have?  100	About how many baseball stickers does Andre have?  200	About how many holographic stickers does Andre have?  600
About how many flower stickers does Andre have?  400	About how many animal stickers does Andre have?  200	About how many football stickers does Andre have?  400

★ Bonus: About how many stickers does Andre have altogether? 1,900