

Name _____

Date _____

Which Is Longer?

Order each item by writing a number in each of the the blank spaces.
Write **1** next to the shortest item in each row. Write **3** next to the longest item.


Example:

sea star



1

2



sun

3

tent



2



tent


3



tiger

1

peanut




cheese

2



egg

1



boat


3



bread

1

house



3



2

kale

Challenge! Draw an object that you think is longer than the one shown.

Drawings will vary, but object should be longer than the cereal.

