


Practice Test: MEASUREMENT ANSWERS

What does a **scale** measure?

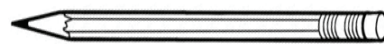
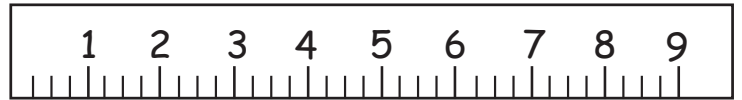
- A. length
- B. volume
- C. weight**
- D. height



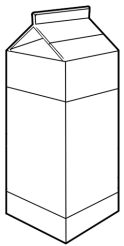
A **liter** is a measurement of

- A. length
- B. volume**
- C. weight


How long is the pencil? 5 inches



Circle the volume **greater** than 1 liter.



1 quart



3 pints



4 cups

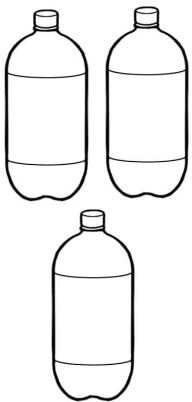
Which is **longest**?

- A. 1 centimeter
- B. 1 millimeter
- C. 1 inch**

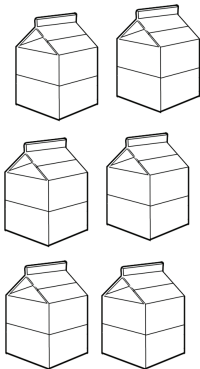
Which is **shortest**?

- A. 1 foot
- B. 1 centimeter**
- C. 1 inch


Circle the volume **equal** to 2 quarts.



3 liters



6 pints



8 cups

Circle the kind of animal that weighs **less** than 1 pound.

