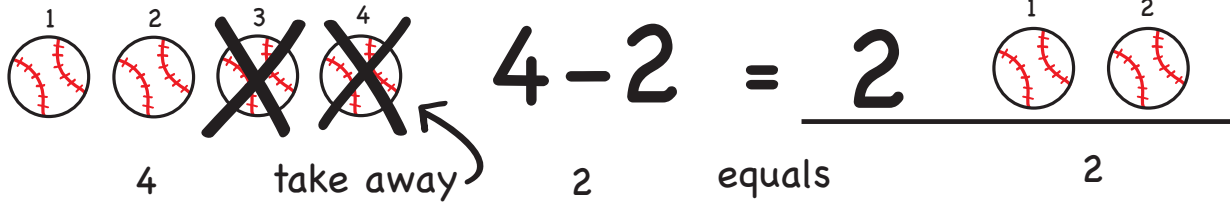


# Let's Practice Subtraction!

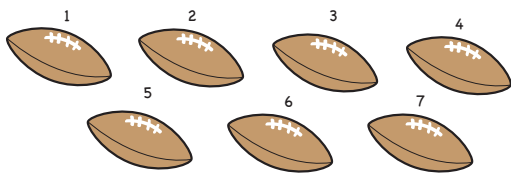
## Answers

Count the pictures and subtract.

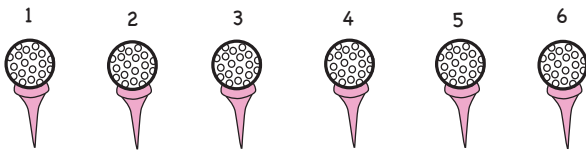
Example:

 1 2 3 4  $4 - 2 = 2$  1 2  
4 take away 2 equals 2


1 2 3 4 5 6 7 8 9 10




$$7 - 2 = \underline{5}$$




$$6 - 5 = \underline{1}$$



$$10 - 1 = \underline{9}$$



$$9 - 2 = \underline{7}$$



$$8 - 4 = \underline{4}$$



$$10 - 7 = \underline{3}$$