


The Three Pigs

Practice
3-Number
Addition

Find out the actual number from the questions below.
Show your work.



Big pig grows four carrots. Medium pig grows five cabbages. Small pig grows seven tomatoes. How many vegetables did they grow in all?



$$4 + 5 + 7 = 16$$


Big pig bought three feet of yarn. Medium pig bought six feet of yarn. Small pig bought eight feet of yarn. How long will the yarn be when they combine the pieces together?



$$3 + 6 + 8 = 17$$


Small pig gave two bags of grain to Chicken on Monday. Big pig gave seven bags of potatoes to Cow on Tuesday. Medium pig gave nine bags of beans to Goose on Wednesday. How many bags of food did the three pigs give away in total?

$$2 + 7 + 9 = 18$$



Challenge!

Small pig cut ten pieces of wood to build a house. Medium pig cut twelve pieces. Big pig cut fifteen pieces. How many pieces of wood do they have?



$$10 + 12 + 15 = 37$$