

Make a Picture Graph At the Bakery

Name _____

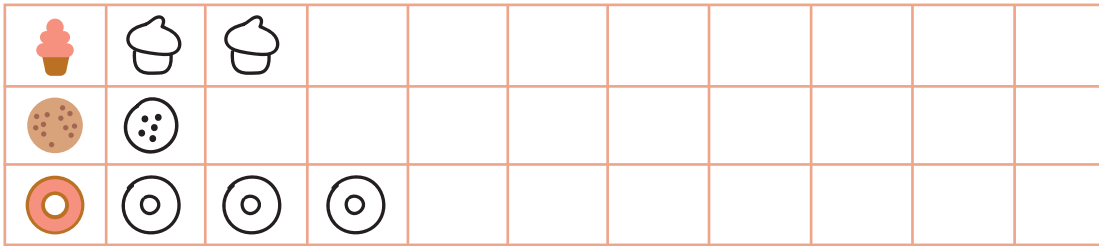
Date _____



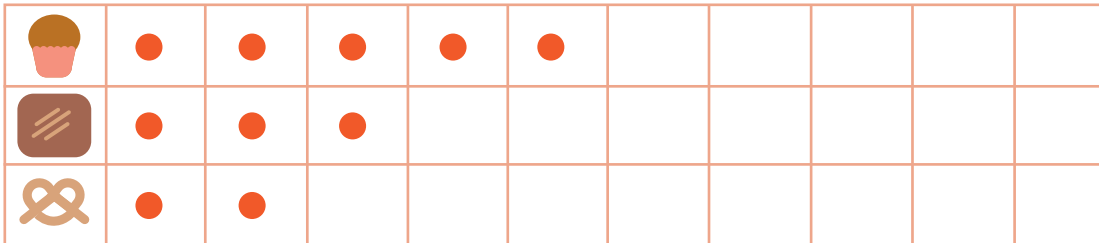
Answer Key

Complete each picture graph. Then answer each question.

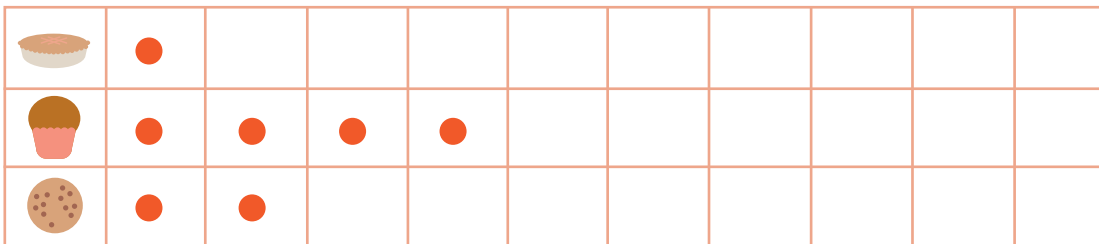
Tommy bought 2 cupcakes, 1 cookie, and 3 doughnuts. How many treats did he buy altogether?



Jamie bought 5 muffins, 3 brownies, and 2 pretzels. How many treats did Jamie buy altogether?



Abi wants to buy 1 pie, 4 muffins, and 2 cookies. How many pastries are there altogether?



There are 5 doughnuts, 1 cupcake, and 1 piece of cake. How many sweets are there in all?

