





Theater Goer! Reading a Pictograph

The theater recorded the numbers of audience members who attended this week's play. Read the pictograph and answer the questions below. Note: each symbol in the pictograph stands for 100 persons.

Day	Number of Audience Members
Monday	
Tuesday	
Wednesday	
Thursday	
Friday	

 = 100 persons

Questions:

1. How many audience members does this symbol  represent?

Answer: 50 Audience Members

2. On what day did the theater have the fewest audience members?

Answer: Friday

3. How many audience members attended the theater from Tuesday to Thursday?

Answer: 2,800 Audience Members

4. How many more audience members did they need on Wednesday to be equal to those on Thursday?

Answer: 50 Audience Members

5. If the entrance fee is \$5 per person, how much did the theater earn on Tuesday?

Answer: \$3,750