











Taxi Company: Reading a Pictograph

These two pictographs compare the miles two taxis traveled in a month. Answer the questions below using information from the pictographs.

Note: each taxi in the pictograph stands for 150 miles.

Taxi A	
Week	Number of Miles
Week 1	
Week 2	
Week 3	
Week 4	

Taxi B	
Week	Number of Miles
Week 1	
Week 2	
Week 3	
Week 4	



Questions:

1. How many miles did Taxi A travel in total?

Answer: 1650

2. How many miles did Taxi B travel in total?

Answer: 1950

3. Which taxi went more miles in total? If the other taxi wanted to catch up, how many miles would he have to go in a month?

Answer: Taxi B / Taxi A would need 300 more miles.

4. How many miles did the two taxis go in total?

Answer: 3600 miles

5. If Taxi A traveled 300 more miles, what would be the difference in total from Taxi B?

Answer: 0 miles