




Eggplant Recipe: Reading a Pictograph

You can cook a variety of dishes using eggplant. See how many of them the chef is planning for his restaurant. Answer the questions below.

Note: each eggplant in the pictograph stands for 3 eggplants.

Recipe	Number of Eggplants
Eggplant Parmesan	
Eggplant Lasagna	
Stuffed Eggplant	



= 3 eggplants

Questions:

1. How many eggplants did the chef use for Eggplant Parmesan?

Answer: **6 x 3 = 18 Eggplants**

2. Which recipe used the least amount of eggplant?

Answer: **Eggplant Lasagna**

3. Which recipe used the most amount of eggplant? How many?

Answer: **Eggplant Parmesan: 18 Eggplants**

4. What recipe used 15 eggplants?

Answer: **Stuffed Eggplant**

5. What is the difference between the number of eggplants in Eggplant Parmesan and in Eggplant Lasagna?

Answer: **18 - 12 = 6 Eggplants**