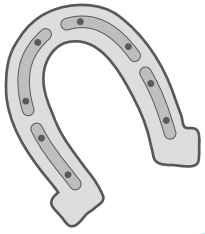
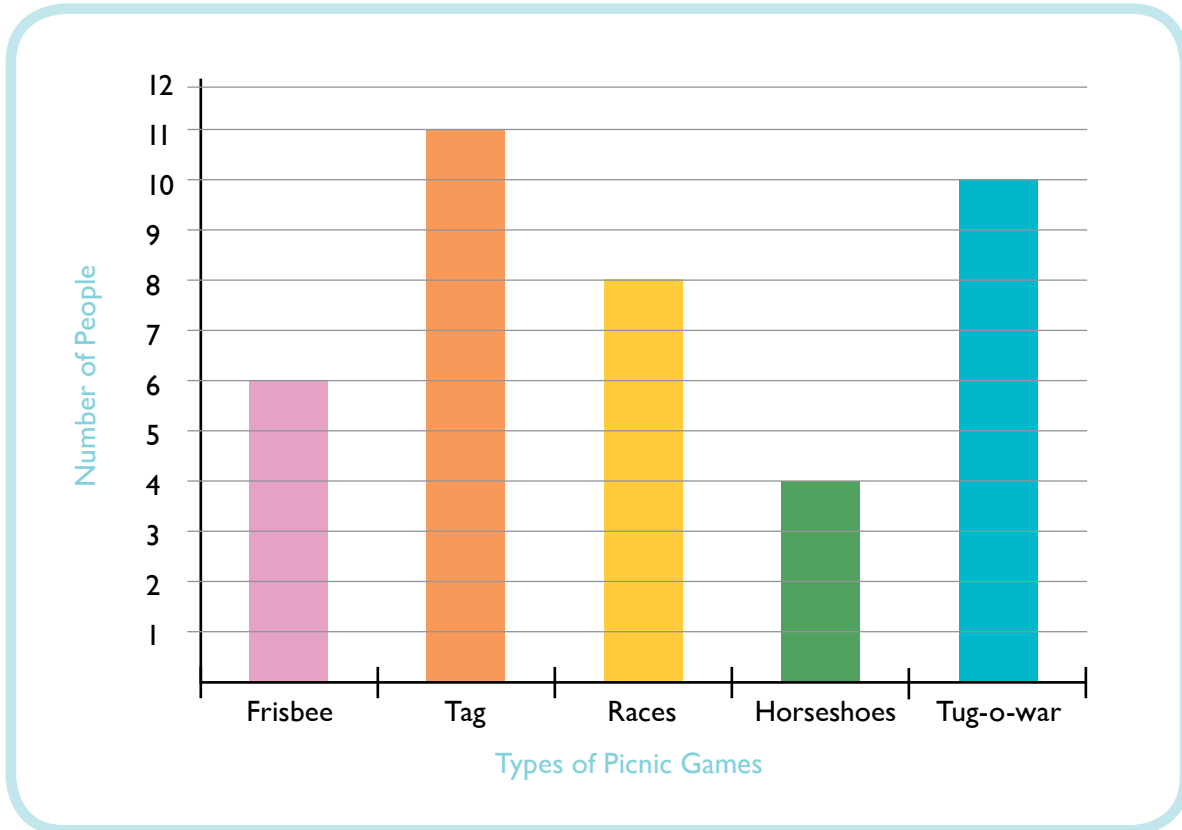



Picnic Bar Graph



Read the bar graph to learn which picnic games were the most popular. Then answer the questions below. Show your work when possible.



1. How many people love races?

8 people

2. How many more people chose tug-o-war than frisbee?

$10 - 6 = 4$ people

3. Add the number of people who love horseshoes and the number of people who love races. What's the difference between that total and the number of people who love tag?

$4 + 8 = 12$ people

$12 - 11 = 1$ person

4. How many more people would it take to make frisbee the most loved picnic activity?

6 more people

5. List the activities in order from most favorite to least favorite.

Tag, Tug-o-war, Races, Frisbee, Horseshoes

