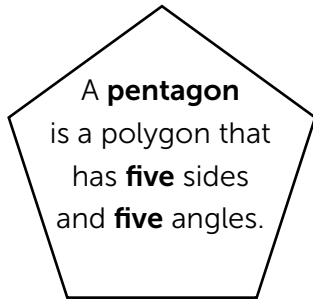
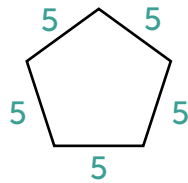


ANSWERS**Pentagon Perimeters**

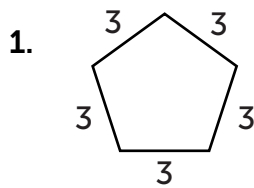
To find the **perimeter** of a pentagon, add up the lengths of each side.



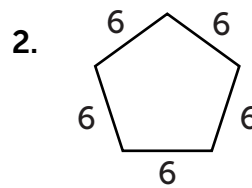
$$5 + 5 + 5 + 5 + 5 = \mathbf{25 \text{ units}}$$



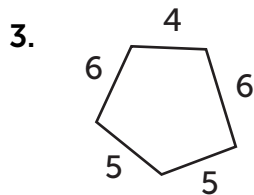
Directions: Find the perimeter of the pentagons.



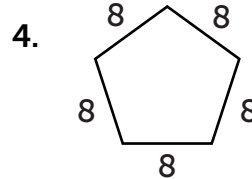
Perimeter: 15 units



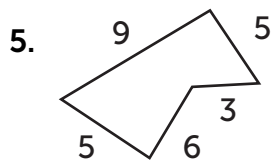
Perimeter: 30 units



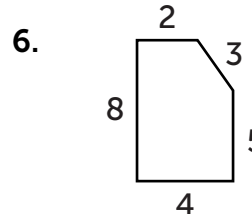
Perimeter: 26 units



Perimeter: 40 units



Perimeter: 28 units



Perimeter: 22 units