
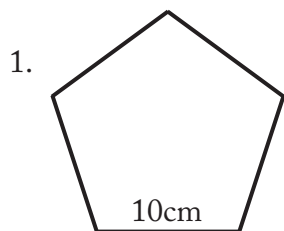


Pentagon Perimeter Practice **answers**

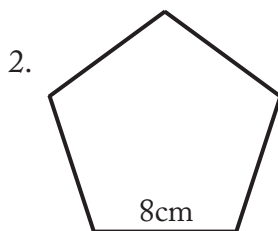


Directions: Find the perimeter of each pentagon.

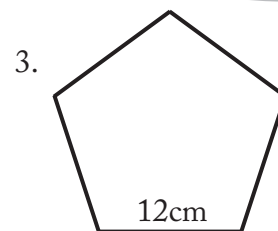
Remember $P=5a$ where a = side.



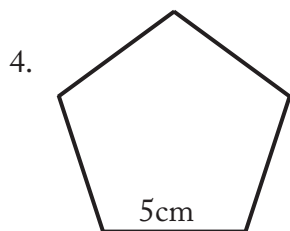
$P= 50\text{cm}$



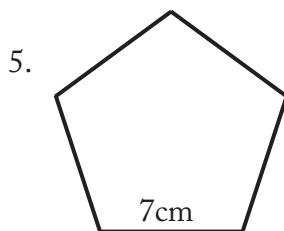
$P= 40\text{cm}$



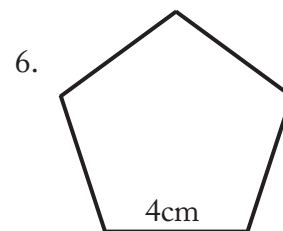
$P= 60\text{cm}$



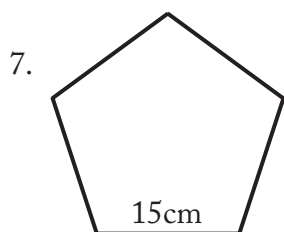
$P= 25\text{cm}$



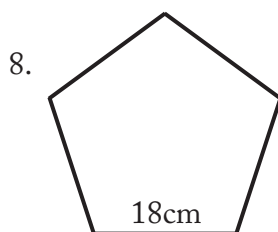
$P= 35\text{cm}$



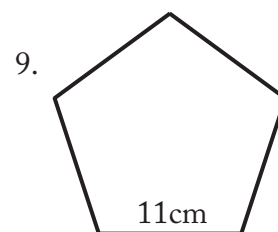
$P= 20\text{cm}$



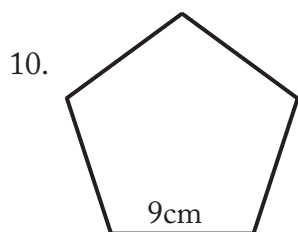
$P= 75\text{cm}$



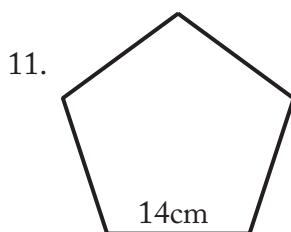
$P= 90\text{cm}$



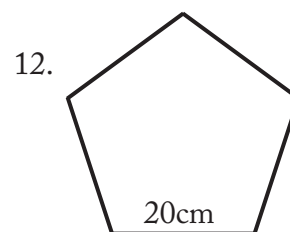
$P= 55\text{cm}$



$P= 45\text{cm}$



$P= 70\text{cm}$



$P= 100\text{cm}$