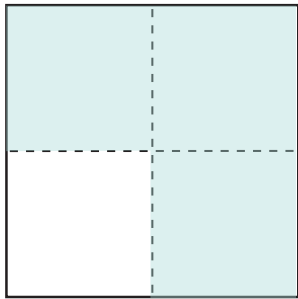



Party Fractions

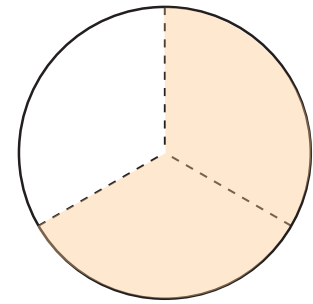
Color the shapes.




Color $\frac{3}{4}$ of this square blue.



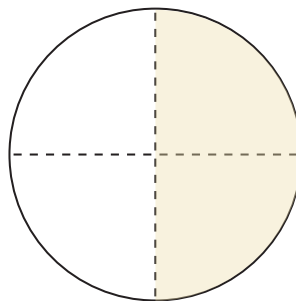
Color $\frac{1}{2}$ of this rectangle purple.



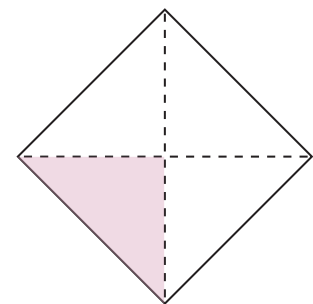
Color $\frac{2}{3}$ of this circle orange.




Color $\frac{2}{8}$ of this rectangle green.



Color $\frac{2}{4}$ of this circle yellow.



Color $\frac{1}{4}$ of this diamond pink.



Color $\frac{1}{16}$ of this rectangle orange.

Color $\frac{4}{16}$ of this rectangle purple.

Color $\frac{2}{16}$ of this rectangle green.

Color $\frac{3}{16}$ of this rectangle blue.

Color $\frac{5}{16}$ of this rectangle pink.

What fraction of the rectangle is left white?

$\frac{1}{16}$

