


Party Favors!



Answer Key

When we add, we bring two or more numbers or things together to make a total.

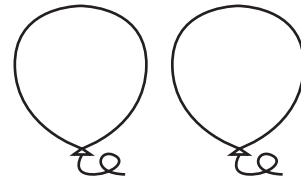


Directions: Patty is having a party with some friends. Add up the balloons. Write the answer on the line.


Patty blew up 3



Patty's mom blew up 2



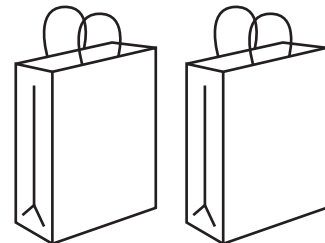
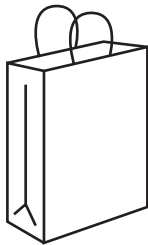
How many



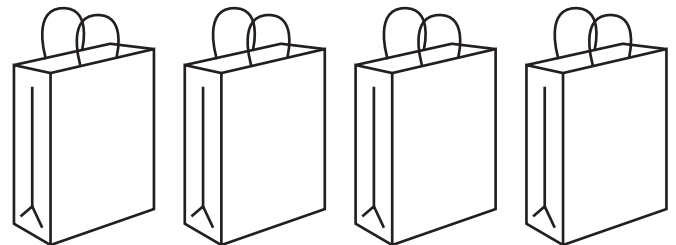
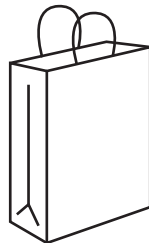
in all?

5

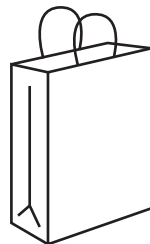
Patty made 2



Patty's mom made 4



How many



in all?

6
