



Far Out Subtraction!


Count how many outer space objects are in each box, then subtract the darker ones. Write your answer in the box on the right.




$$\begin{array}{r} 6 \\ -4 \\ \hline 2 \end{array}$$



$$\begin{array}{r} 3 \\ -2 \\ \hline 1 \end{array}$$



$$\begin{array}{r} 6 \\ -2 \\ \hline 4 \end{array}$$



$$\begin{array}{r} 4 \\ -3 \\ \hline 1 \end{array}$$