

# Open Number Line

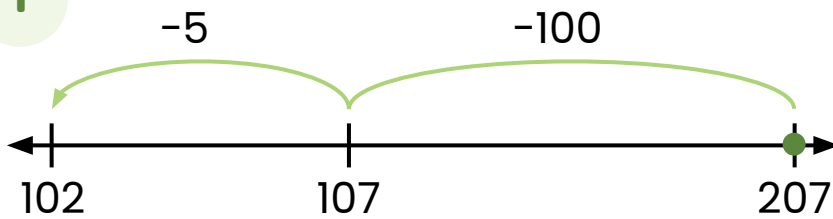
## Subtraction Within 1,000:

### Write the Equation #3



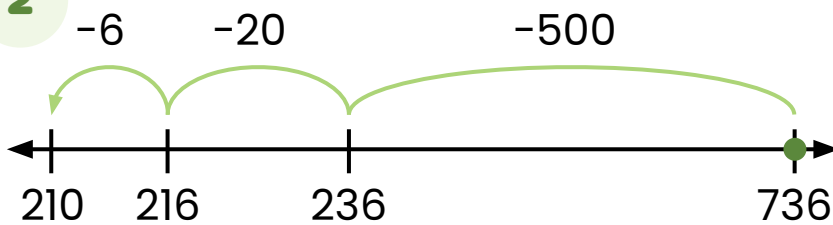
Directions: Write the equation that matches each number line.

1



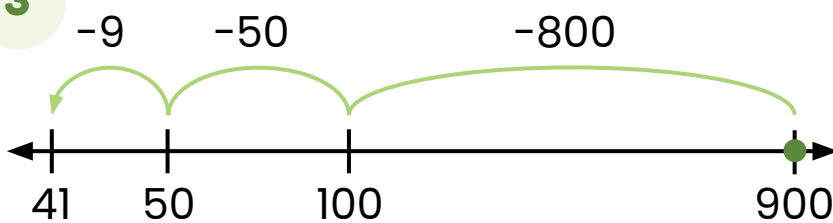
$$\boxed{207} - \boxed{105} = \boxed{102}$$

2



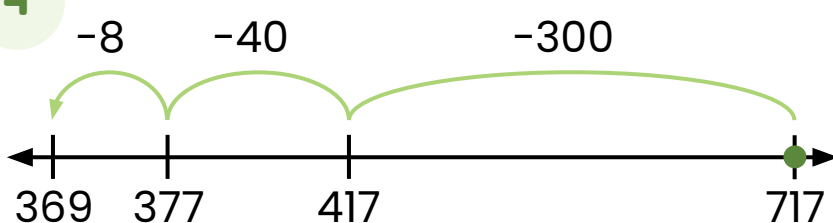
$$\boxed{736} - \boxed{526} = \boxed{210}$$

3



$$\boxed{900} - \boxed{859} = \boxed{41}$$

4



$$\boxed{717} - \boxed{348} = \boxed{369}$$