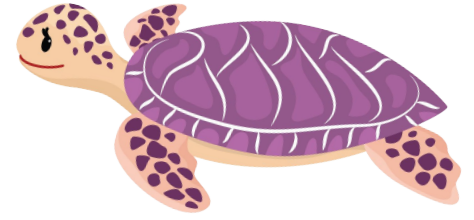


Open Number Line

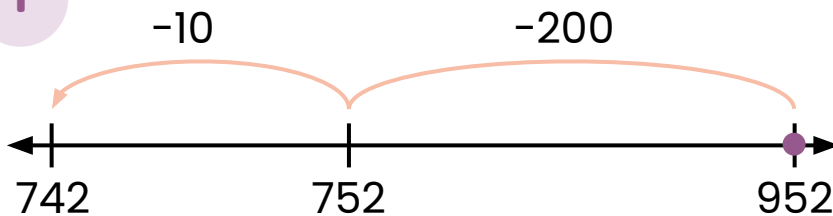
Subtraction Within 1,000:

Write the Equation #2



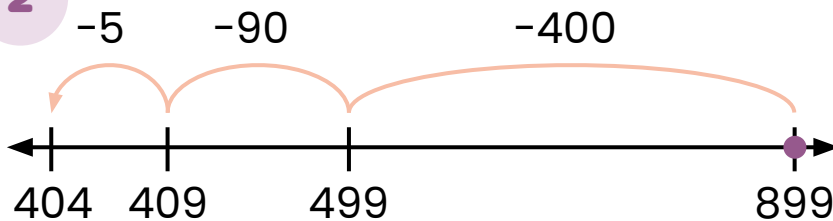
Directions: Write the equation that matches each number line.

1



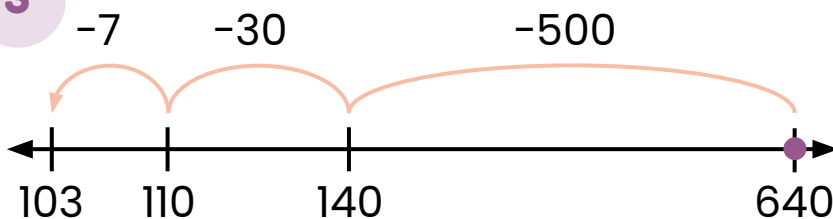
$$\boxed{952} - \boxed{210} = \boxed{742}$$

2



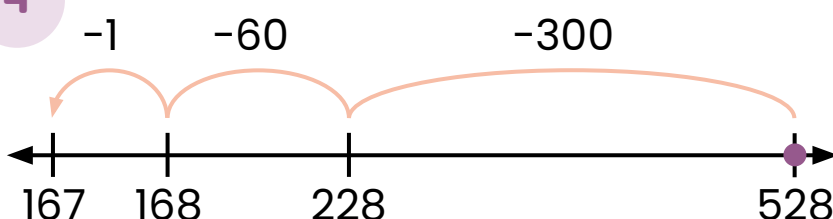
$$\boxed{899} - \boxed{495} = \boxed{404}$$

3



$$\boxed{640} - \boxed{537} = \boxed{103}$$

4



$$\boxed{528} - \boxed{361} = \boxed{167}$$