

Name _____

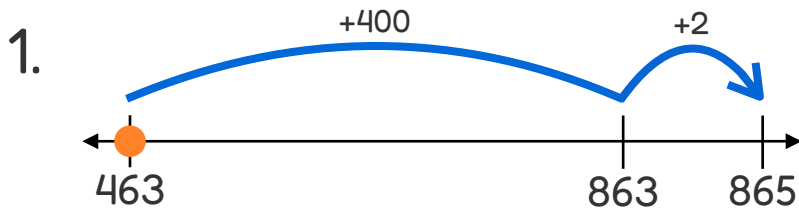
Date _____

ANSWERS

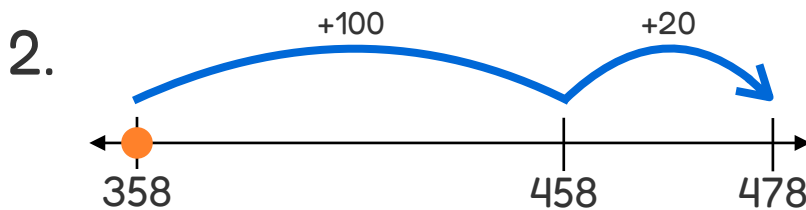
Open Number Line Addition Within 1,000: Write the Equation #1



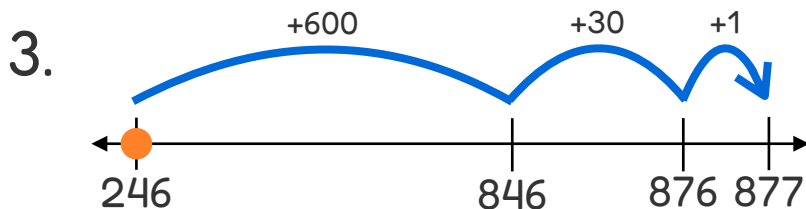
Directions: Write an equation that matches each number line.



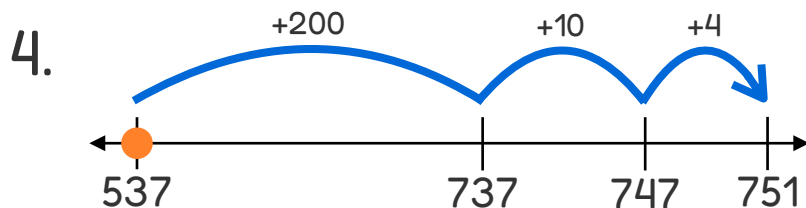
$$\boxed{463} + \boxed{402} = \boxed{865}$$



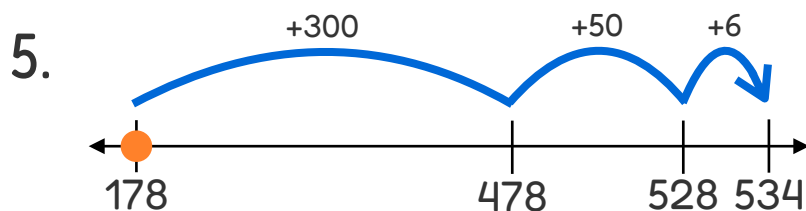
$$\boxed{358} + \boxed{120} = \boxed{478}$$



$$\boxed{246} + \boxed{631} = \boxed{877}$$



$$\boxed{537} + \boxed{214} = \boxed{751}$$



$$\boxed{178} + \boxed{356} = \boxed{534}$$