


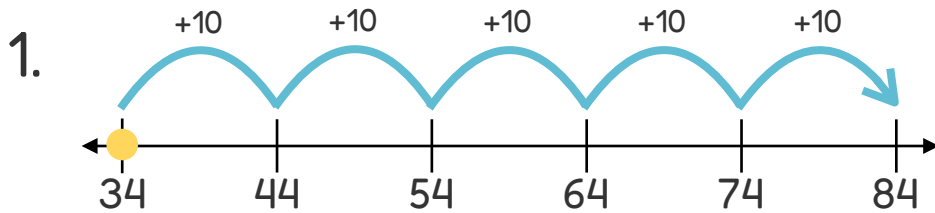
Name _____

Date **ANSWER KEY**

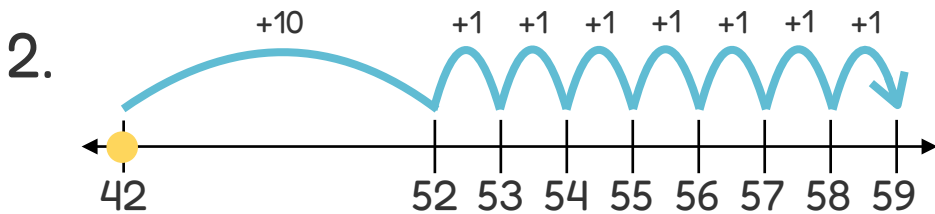
Open Number Line Addition Within 100: Write the Equation #3



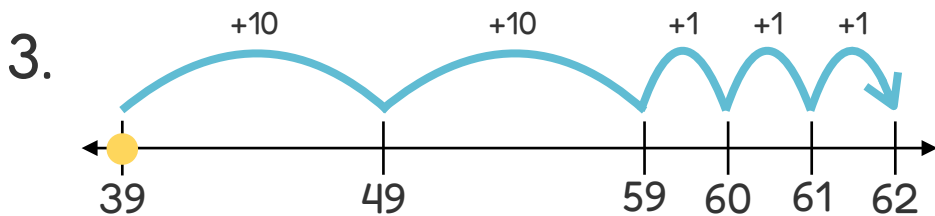
Directions: Write an equation that matches each number line.



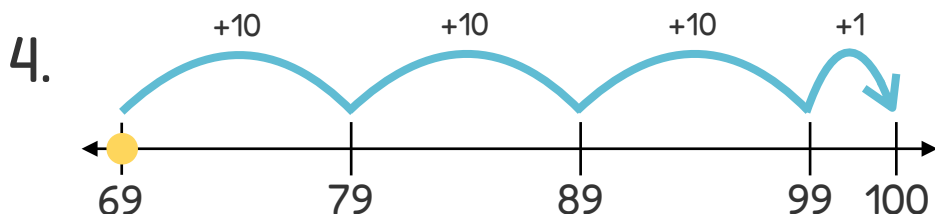
$$\boxed{34} + \boxed{50} = \boxed{84}$$



$$\boxed{42} + \boxed{17} = \boxed{59}$$



$$\boxed{39} + \boxed{23} = \boxed{62}$$



$$\boxed{69} + \boxed{31} = \boxed{100}$$