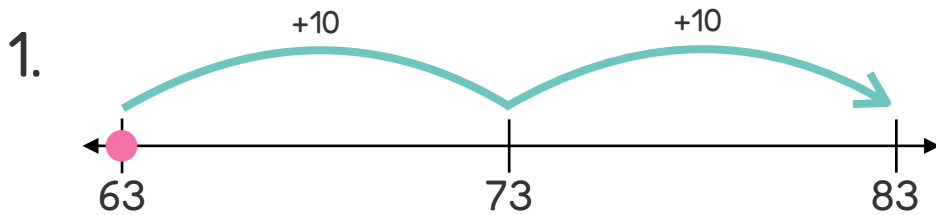



Name \_\_\_\_\_

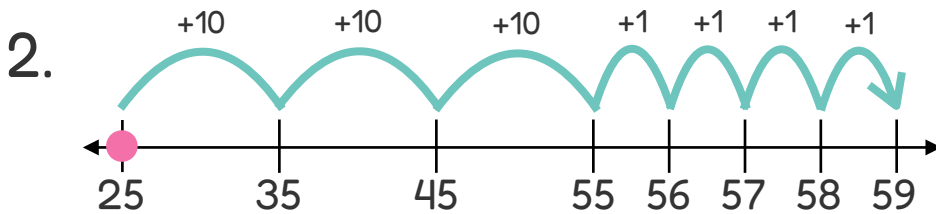
Date **ANSWER KEY**

# Open Number Line Addition Within 100: Write the Equation #2

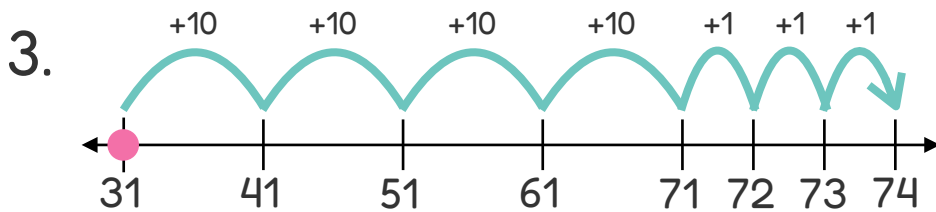
Directions: Write an equation that matches each number line.



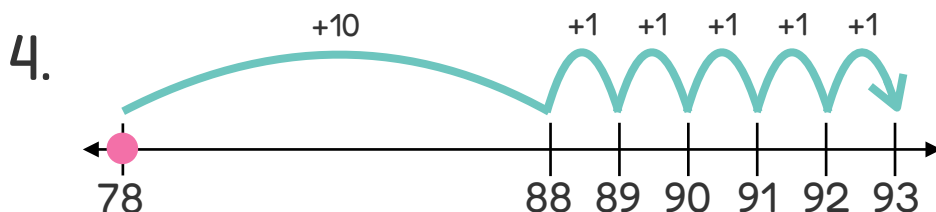
$$\boxed{63} + \boxed{20} = \boxed{83}$$



$$\boxed{25} + \boxed{34} = \boxed{59}$$



$$\boxed{31} + \boxed{43} = \boxed{74}$$



$$\boxed{78} + \boxed{15} = \boxed{93}$$