

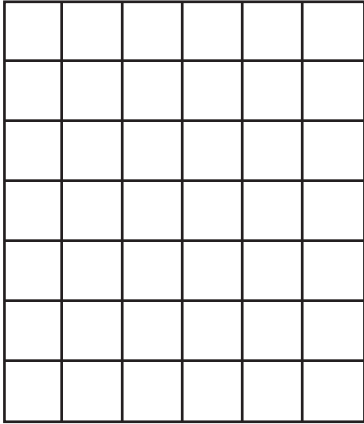
Name: _____

Date: _____

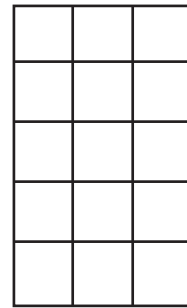
One-Digit Multiplication with Area Models

Directions: Use the area models to complete the following multiplication equations.

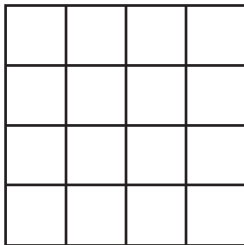
1. $\underline{7} \times \underline{6} = 42$




2. $\underline{5} \times \underline{3} = 15$



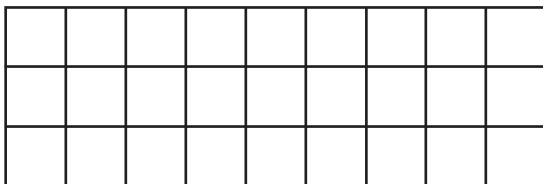
3. $\underline{4} \times \underline{4} = 16$



4. $\underline{6} \times \underline{5} = 30$



5. $\underline{3} \times \underline{9} = 27$



6. $\underline{4} \times \underline{8} = 32$

