


Naming Quadrilaterals

Quadrilaterals are polygons with four edges (sides), four vertices (corners).
Choose the word from the word bank and write the correct name of each quadrilateral.

Kite




SQUARE

Rhombus



RECTANGLE

Trapezoid




KITE

Rectangle




PARALLELOGRAM

Square



TRAPEZOID

Parallelogram



RHOMBUS