

Name that Angle!

Identify the angles by writing right, acute, or obtuse on the line.

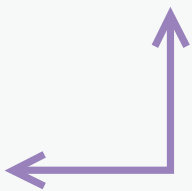
A **right angle** forms a square corner.



An **acute angle** is less than a right angle.



An **obtuse angle** is greater than a right angle.



right



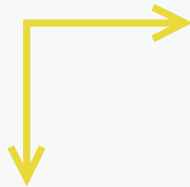
acute



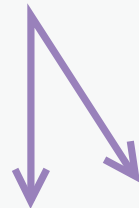
obtuse



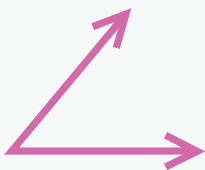
obtuse




right



acute



acute



obtuse



right