



My Shape Riddles

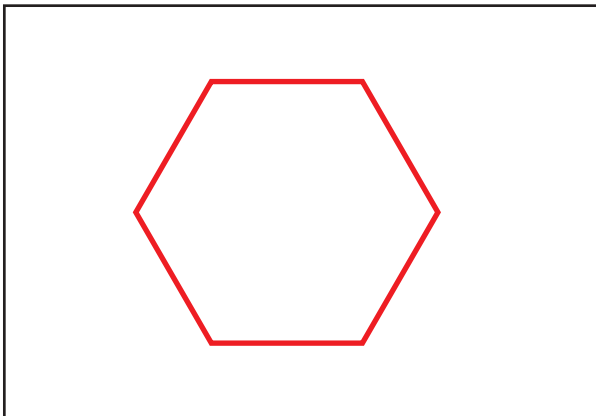
Use the clues to figure out the mystery shape, then draw each shape.



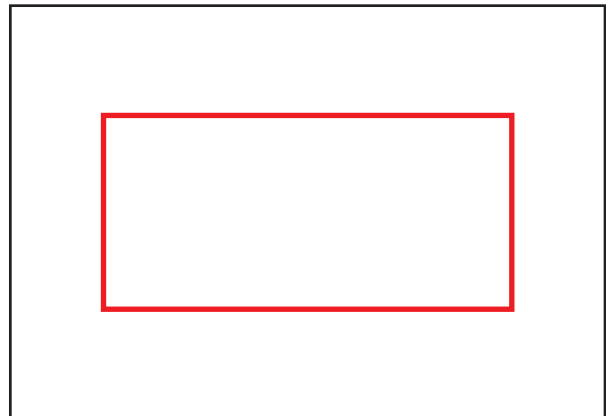
I have 3 sides and 3 angles. I am a polygon. What shape am I?



I have no corners and no sides. One half of me is exactly like the other.



I have 6 sides and 6 corners. What am I?



I have 4 sides and 4 corners, but I am not a square. 2 sides are short and 2 sides are long.

Write your own!

I have 4 sides and 4 corners.

I am a square.

