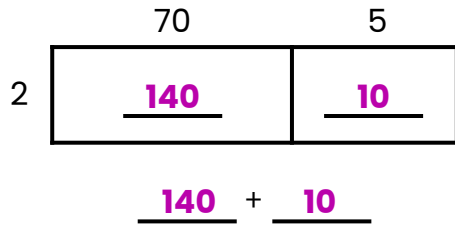


Multiplying Using Area Models: One-Digit by Two-Digit #2

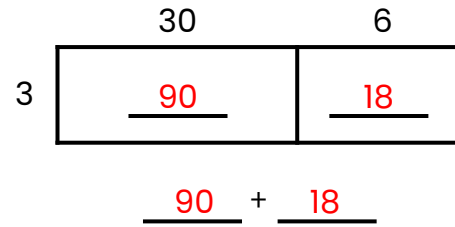


Find each product using the area model. First, write the partial products inside of the area model. Then, fill in the addition expression. Last, write the product. The first problem has been done for you.

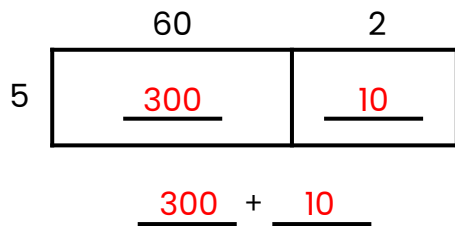
1. $2 \times 75 = \underline{150}$



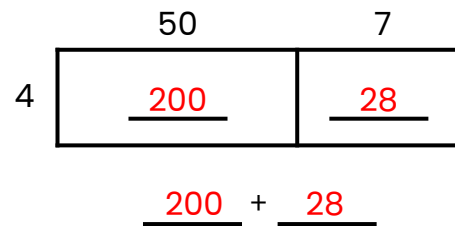
2. $3 \times 36 = \underline{108}$



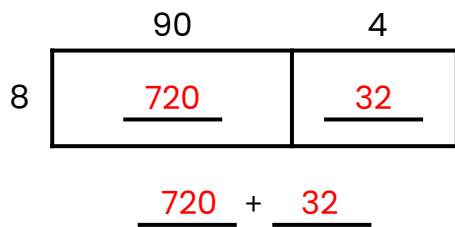
3. $5 \times 62 = \underline{310}$



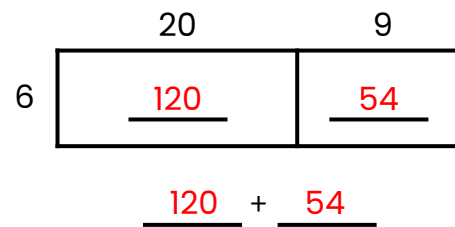
4. $4 \times 57 = \underline{228}$



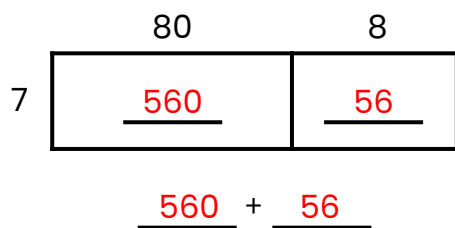
5. $8 \times 94 = \underline{752}$



6. $6 \times 29 = \underline{174}$



7. $7 \times 88 = \underline{616}$



8. $9 \times 47 = \underline{423}$

