



Multiplying by Seven

Find the product.


$$\begin{array}{r} 2 \\ \times 7 \\ \hline 14 \end{array}$$

$$\begin{array}{r} 7 \\ \times 3 \\ \hline 21 \end{array}$$

$$\begin{array}{r} 7 \\ \times 0 \\ \hline 0 \end{array}$$

$$\begin{array}{r} 1 \\ \times 7 \\ \hline 7 \end{array}$$



$$\begin{array}{r} 4 \\ \times 7 \\ \hline 28 \end{array}$$

$$\begin{array}{r} 7 \\ \times 6 \\ \hline 42 \end{array}$$


$$\begin{array}{r} 8 \\ \times 7 \\ \hline 56 \end{array}$$


$$\begin{array}{r} 7 \\ \times 4 \\ \hline 28 \end{array}$$

$$\begin{array}{r} 7 \\ \times 5 \\ \hline 35 \end{array}$$

$$\begin{array}{r} 10 \\ \times 7 \\ \hline 70 \end{array}$$


$$\begin{array}{r} 7 \\ \times 7 \\ \hline 49 \end{array}$$

$$\begin{array}{r} 6 \\ \times 7 \\ \hline 42 \end{array}$$



$$\begin{array}{r} 7 \\ \times 8 \\ \hline 56 \end{array}$$

$$\begin{array}{r} 9 \\ \times 7 \\ \hline 63 \end{array}$$

$$\begin{array}{r} 10 \\ \times 7 \\ \hline 70 \end{array}$$

$$\begin{array}{r} 3 \\ \times 7 \\ \hline 21 \end{array}$$


Fill in the multiplication chart.

x	1	2	3	4	5	6	7	8	9	10
7	7	14	21	28	35	42	49	56	63	70