



Multiplying by Ten


Find the product.


$$\begin{array}{r} 10 \\ \times 1 \\ \hline 10 \end{array}$$

$$\begin{array}{r} 2 \\ \times 10 \\ \hline 20 \end{array}$$



$$\begin{array}{r} 10 \\ \times 4 \\ \hline 40 \end{array}$$

$$\begin{array}{r} 10 \\ \times 3 \\ \hline 30 \end{array}$$



$$\begin{array}{r} 4 \\ \times 10 \\ \hline 40 \end{array}$$

$$\begin{array}{r} 3 \\ \times 10 \\ \hline 30 \end{array}$$

$$\begin{array}{r} 10 \\ \times 5 \\ \hline 50 \end{array}$$


$$\begin{array}{r} 10 \\ \times 7 \\ \hline 70 \end{array}$$


$$\begin{array}{r} 10 \\ \times 8 \\ \hline 80 \end{array}$$



$$\begin{array}{r} 6 \\ \times 10 \\ \hline 60 \end{array}$$


$$\begin{array}{r} 10 \\ \times 10 \\ \hline 100 \end{array}$$

$$\begin{array}{r} 10 \\ \times 2 \\ \hline 20 \end{array}$$


$$\begin{array}{r} 9 \\ \times 10 \\ \hline 90 \end{array}$$

$$\begin{array}{r} 7 \\ \times 10 \\ \hline 70 \end{array}$$


$$\begin{array}{r} 10 \\ \times 6 \\ \hline 60 \end{array}$$

$$\begin{array}{r} 5 \\ \times 10 \\ \hline 50 \end{array}$$




Fill in the multiplication chart.

x	1	2	3	4	5	6	7	8	9	10
10	<i>10</i>	<i>20</i>	<i>30</i>	<i>40</i>	<i>50</i>	<i>60</i>	<i>70</i>	<i>80</i>	<i>90</i>	<i>100</i>