


Multiplication:

Repeated Addition 2

Directions: Find the total by writing both repeated addition and multiplication equations.

Example

Find the total number of legs on these five, furry cats.




Repeated addition sentence: $4 + 4 + 4 + 4 + 4 = 20$ legs

Multiplication sentence: $5 \times 4 = 20$ legs

Now you try!

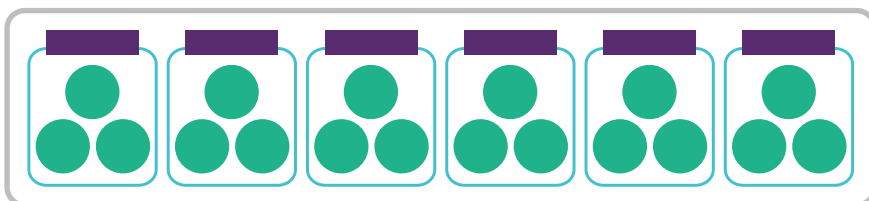
1. Find the total number of petals on the flowers.



Repeated addition sentence: $5 + 5 + 5 = 15$ petals

Multiplication sentence: $3 \times 5 = 15$ petals

2. Find the total number of pieces of candy in the candy jar.



Addition sentence: $3 + 3 + 3 + 3 + 3 + 3 = 18$ pieces of candy

Multiplication sentence: $6 \times 3 = 18$ pieces of candy

