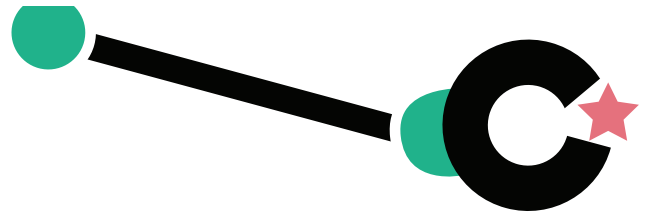



Multiplication:

Repeated Addition



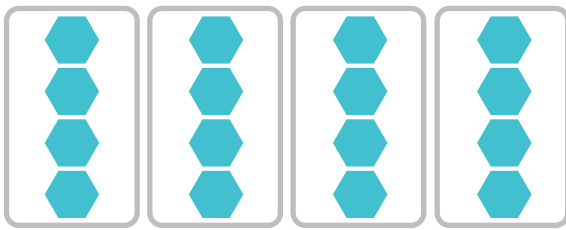
Directions: You can use repeated addition to find the total number of objects in equal groups.

For example, look at this problem.




3 equal groups of 2 apples can be represented by this repeated addition equation: $2 + 2 + 2 = 6$.

Use repeated addition to find the total number of objects in each question below.




1. Repeated addition equation: $4 + 4 + 4 + 4 = 16$



2. Repeated addition equation: $8 + 8 + 8 + 8 + 8 = 40$



3. Repeated addition equation: $9 + 9 + 9 = 27$



4. Repeated addition equation: $2 + 2 + 2 + 2 + 2 + 2 = 12$