


Multiplication Visual Models: Multiple Choice

Directions: Which one is not true? Circle your answer for each question below.

1. Which of the following does **NOT** represent 6×9 ?

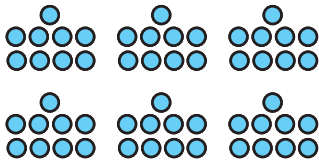
a.




b.

54

c.




d.




2. Which of the following does **NOT** represent 7×7 ?

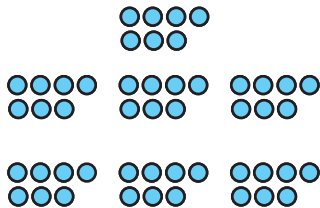
a.



b.



c.




d.

49

3. Which of the following does **NOT** represent 8×9 ?


a.




b.

72


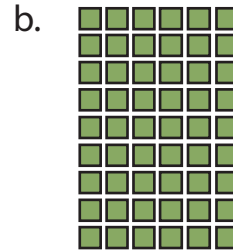
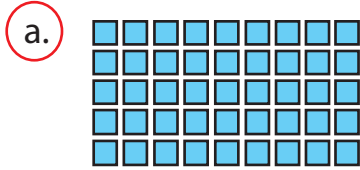
c.



d.



4. Which of the following does **NOT** represent 9×6 ?





d. **54**


5. Which of the following does **NOT** represent 6×7 ?

a. **42**

b. **41**



6. Which of the following does **NOT** represent 8×8 ?



b. **64**

