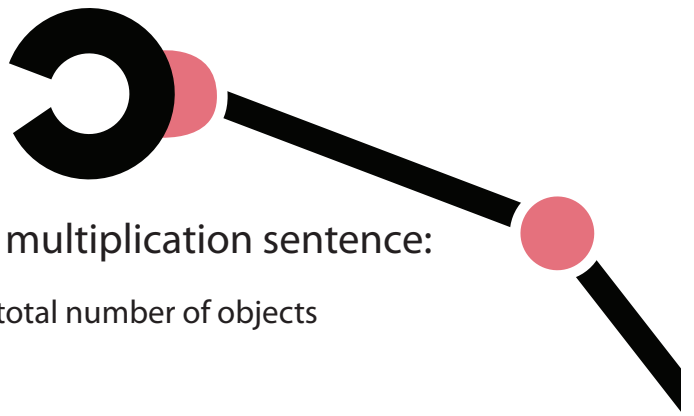


Multiplication:

Let's Make an Array!




Review what each factor represents in this multiplication sentence:

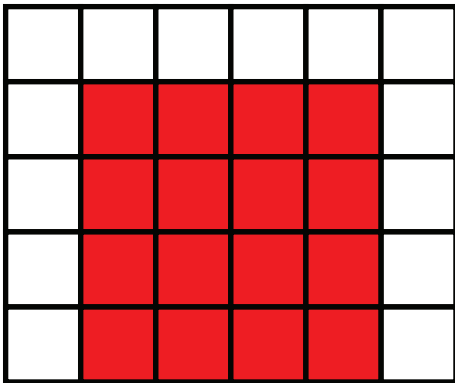
rows $\leftarrow 4 \times 3 = 12 \rightarrow$ total number of objects
objects in each row

Make an array for each multiplication problem and fill in the answer. Color in each array.

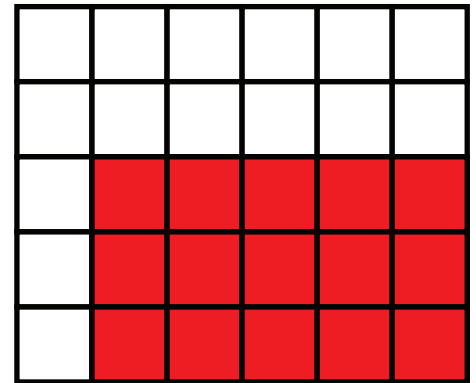
Example: $2 \times 4 = 8$



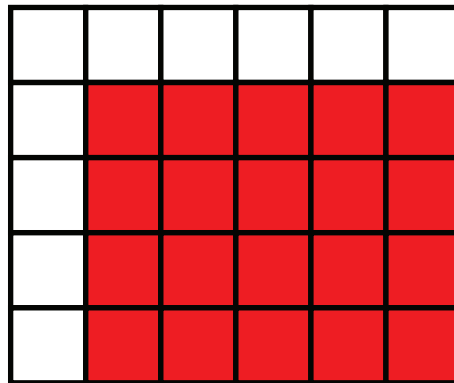
1. $4 \times 4 = 16$




2. $3 \times 5 = 15$



3. $4 \times 5 = 20$



5. $5 \times 6 = 30$



4. $1 \times 2 = 2$

