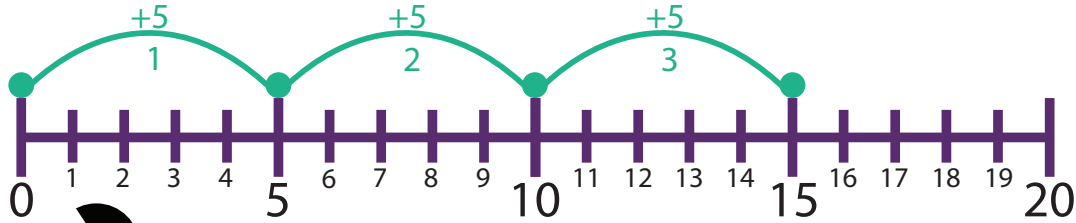


# Multiplication:

## Hop Along the Number Line to Multiply (Part 2)

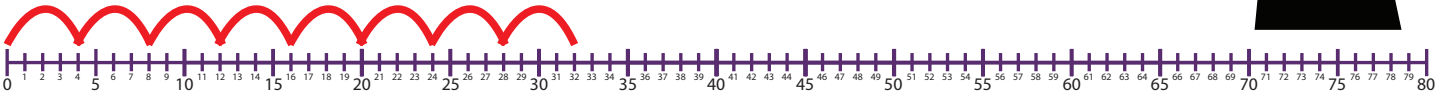
**Directions:** Hop along the number line to solve each multiplication problem. The first problem has been done for you.

**Example:**

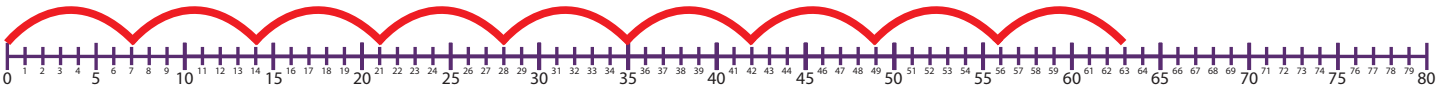


$$3 \times 5 = 15$$

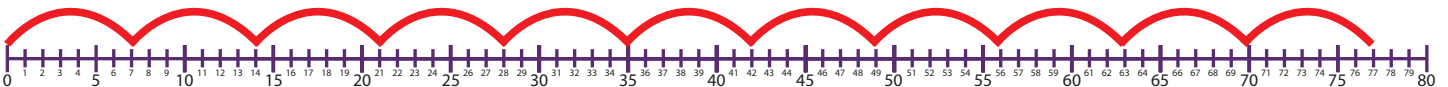
1.  $8 \times 4 = \underline{32}$



2.  $9 \times 7 = \underline{63}$



3.  $11 \times 7 = \underline{77}$



4.  $8 \times 10 = \underline{80}$

