
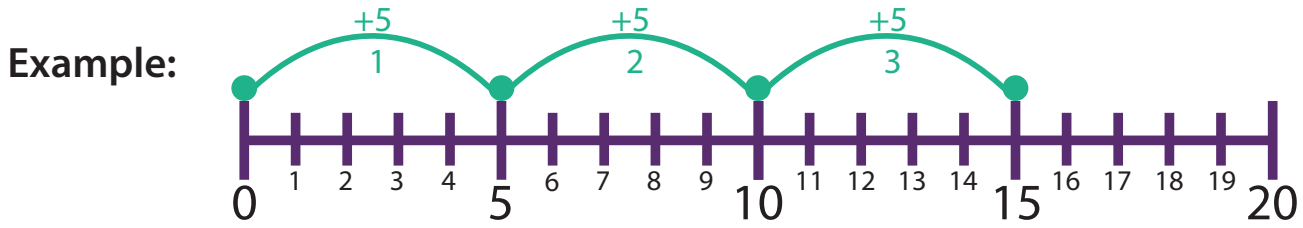


# Multiplication:

Hop Along the Number Line to Multiply



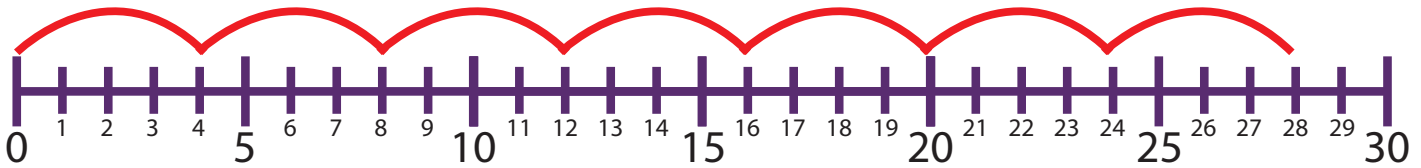
Hoppy the frog-bot hopped up this number line to solve  $3 \times 5$ :



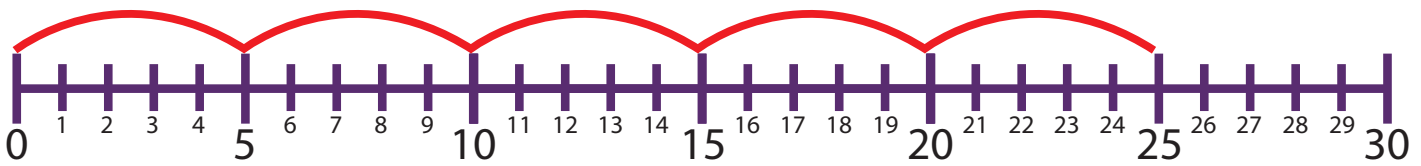
$$3 \times 5 = 15$$

**Directions:** Hop up the number to find the product (answer). Write your answer on the blank space.

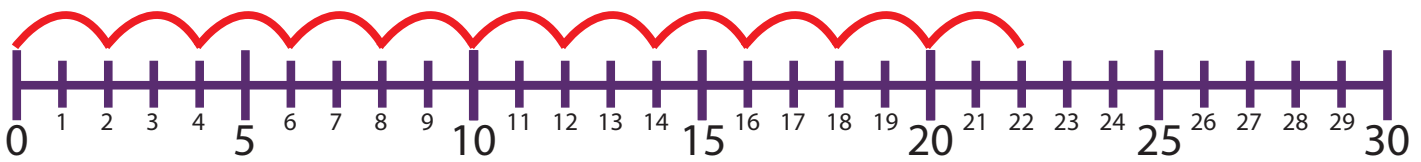
1.  $7 \times 4 = \underline{28}$



2.  $5 \times 5 = \underline{25}$



3.  $11 \times 2 = \underline{22}$



4.  $3 \times 10 = \underline{30}$

