


Multiplication:

Equal Group Problems

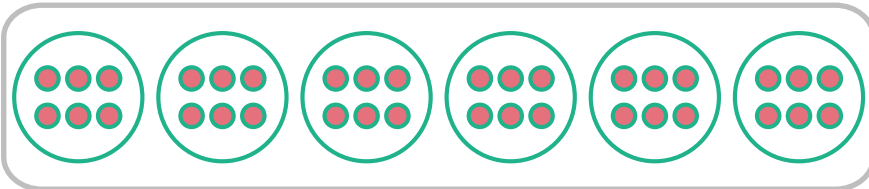
Directions: Use the equal group drawings to solve the multiplication problems.

1.




$$5 \times 3 = \underline{15}$$

2.




$$6 \times 6 = \underline{36}$$

3.



$$10 \times 4 = \underline{40}$$

4.



$$7 \times 4 = \underline{28}$$

