

Name \_\_\_\_\_

Date \_\_\_\_\_


# Multiplication & Division Partner Word Problems

Step 1: Read the Whole Problem

Step 2: Circle Clue Words and Numbers


Step 3: Make a Model

Step 4: Solve the Problem




Javier has a bag of 45 cherries to evenly split up into his 5 school lunches for the week. How many cherries will he get to eat each day?

Javier will get to eat 9 cherries each day.




Malala started a babysitting business. On Saturday she babysat for 3 hours and earned \$24. How much did she charge per hour?

Malala earned \$8 an hour.



Javier has a bag of 45 cherries to evenly split up into his 5 school lunches for the week. How many cherries will he get to eat each day?

Javier will get to eat 9 cherries each day.



Malala started a babysitting business. On Saturday she babysat for 3 hours and earned \$24. How much did she charge per hour?

Malala earned \$8 an hour.