



Multiplying Acorns

Complete the addition and multiplication sentences for each picture.




$$2 + \underline{2} + \underline{2} + \underline{2} = \underline{8}$$

$$4 \times 2 = \underline{8}$$




$$3 + \underline{3} + \underline{3} = \underline{9}$$

$$3 \times 3 = \underline{9}$$



$$4 + \underline{4} + \underline{4} + \underline{4} = \underline{16}$$

$$4 \times 4 = \underline{16}$$



$$6 + \underline{6} = \underline{12}$$

$$2 \times 6 = \underline{12}$$